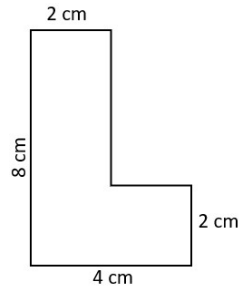
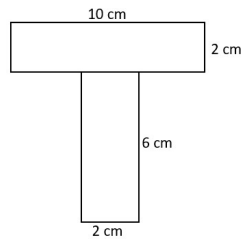


## Area – 1

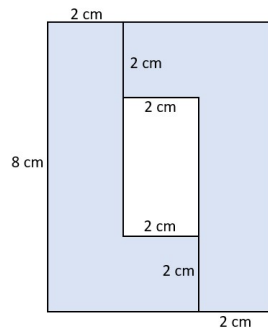
1. Area of a square = 2 ( Length + Breadth). Mark True / False.
2. Area of a rectangle = Length x Breadth. Mark True / False.
3. Find the area of the below given figure.



4. Find the area of the below given figure.



5. Find the area of the below given figure.



6. Length and breadth of a rectangle is 20 m and 12m respectively. Find the area of the rectangle.
7. Calculate the area of a rectangle whose length is 60 cm and breadth is 6.5 cm.
8. Calculate the area of a square whose side is equal to 8 mm.
9. The perimeter of a square is 60 cm. Find out the area of the square.
10. The perimeter of a garden is 24 m. If it's width is 4 m, then find out area of the garden.